

**TRIAL HIGHER SCHOOL CERTIFICATE
EXAMINATION 2005**

**MATHEMATICS
EXTENSION 2**

*Time Allowed – 3 Hours
(Plus 5 minutes Reading Time)*

All questions may be attempted

All questions are of equal value

Department of Education approved calculators are permitted

In every question, show all necessary working

Marks may not be awarded for careless or badly arranged work

No grid paper is to be used unless provided with the examination paper

The answers to all questions are to be returned in separate bundles clearly labeled Question 1, Question 2, etc. Each question must show your Candidate Number.

Question 1 (15 marks)**Marks**

- (a) Find $\int \frac{dx}{x(\ln x)^2}$. 2
- (b) Find $\int \frac{x^2 - x - 21}{(2x - 1)(x^2 + 4)} dx$. 4
- (c) Evaluate $\int_0^{\frac{\pi}{2}} \frac{dx}{1 + \sin x + \cos x}$. 4
- (d) (i) Prove $\int_0^a f(x) dx = \int_0^a f(a - x) dx$. 2
- (ii) Hence evaluate $\int_0^{\frac{\pi}{4}} \frac{1 - \tan x}{1 + \tan x} dx$. 3

Question 2 (15 marks) (Start a new page)

- (a) Express $z = \sqrt{3} + i$ in modulus-argument form. 3
Hence show that $z^7 + 64z = 0$.
- (b) On an argand diagram the point P representing the complex number z moves so that $|z - (1 + i)| = 1$.
- (i) Sketch the locus of P . 2
- (ii) Find the greatest value of $|z|$. 2
- (iii) Shade the region where $|z - (1 + i)| \leq 1$ and $0 < \arg(z - 1) < \frac{\pi}{4}$ 3
and find the area of this region.
- (c) If w is one of the complex roots of $z^3 = 1$.
- (i) Show that w^2 is also a root. 1
- (ii) Show that $1 + w + w^2 = 0$. 1
- (iii) Evaluate $(1 - w)(1 - w^2)(1 - w^4)(1 - w^8)$. 3

Question 3 (15 marks) (Start a new page)

Marks

- (a) Given that $x + i$ is a factor of $P(x) = x^4 + 3x^3 + 6x^2 + 3x + 5$, factorize $P(x)$ over the complex field. **4**
- (b) Given that the equation $x^4 - 5x^3 - 9x^2 + 81x - 108 = 0$ has a root of multiplicity 3, find all the roots of this equation. **3**
- (c) If α, β, γ are the roots of $x^3 - 3x^2 + 2x - 1 = 0$, find the equation whose roots are
- (i) $\frac{1}{\alpha}, \frac{1}{\beta}, \frac{1}{\gamma}$ **2**
- (ii) $\alpha^2, \beta^2, \gamma^2$. **3**

(d)

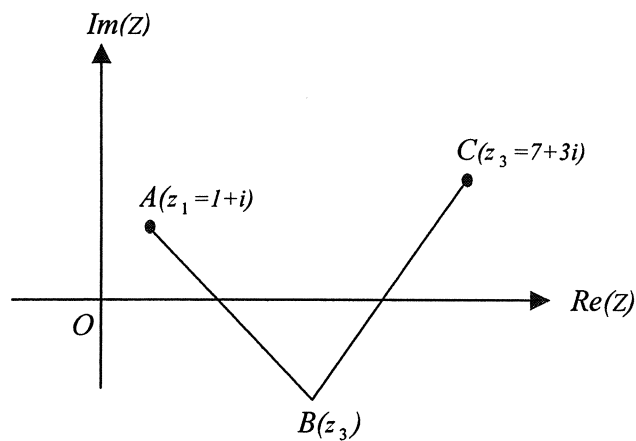


diagram not to scale

The points A and C represent the complex numbers $z_1 = 1 + i$ and $z_2 = 7 + 3i$. **3**

Find the complex number z_2 represented by B such that $\triangle ABC$ is isosceles and right angled at B .

Question 4 (15 marks) (Start a new page)

Marks

- (a) An ellipse has the equation $\frac{x^2}{16} + \frac{y^2}{9} = 1$.
- (i) Sketch the ellipse showing the foci S and S' and the directrices. 4
- (ii) Prove that the tangent at the point $P(4 \cos \theta, 3 \sin \theta)$ to the ellipse has the equation $\frac{x \cos \theta}{4} + \frac{y \sin \theta}{3} = 1$. 3
- (iii) The ellipse meets the y -axis at B and B' . The tangents at B and B' meet the tangent at P at the points Q and Q' respectively. 3

Prove that $BQ \cdot BQ' = 16$.

(b)

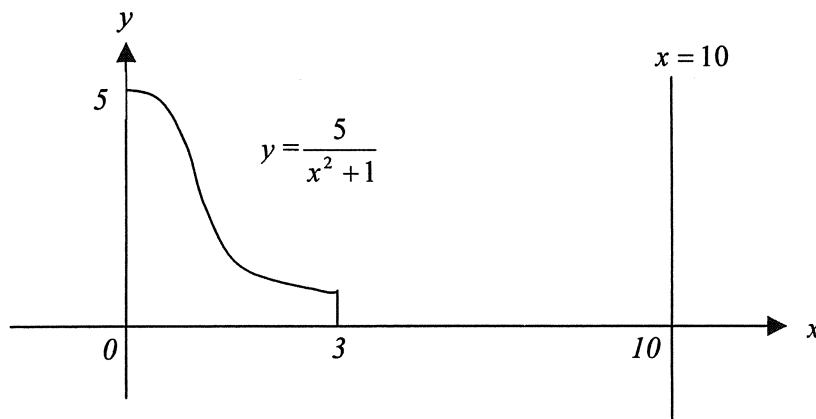


diagram not to scale

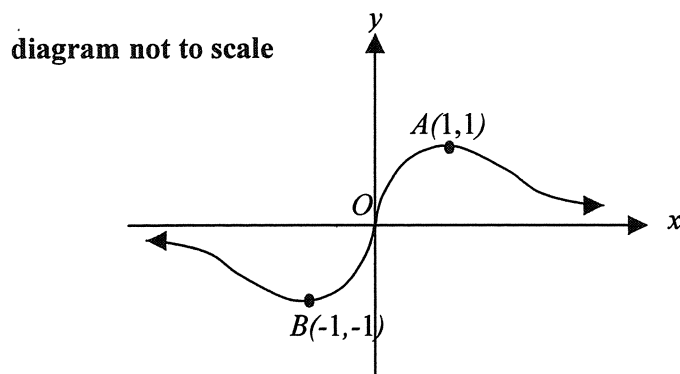
A circular flange is formed by rotating the region bounded by the curve $y = \frac{5}{x^2 + 1}$, the x axis and the lines $x = 0$ and $x = 3$, through one complete revolution about the line $x = 10$. (All measurements are in centimetres).

- (i) Use the method of cylindrical shells to show that the volume V cm³ of the flange is given by $V = \int_0^3 \frac{(100\pi - 10\pi x)}{x^2 + 1} dx$. 2
- (ii) Find the volume of the flange correct to the nearest cm³. 3

Question 5 (15 marks) (Start a new page)

Marks

(a)



In the diagram above, the curve $y = \frac{2x}{1+x^2}$ is sketched with turning points $A(1,1)$ and $B(-1,-1)$.

(i) On separate diagrams, draw sketches of :

(α) $y = \frac{1+x^2}{2x}$ 2

(β) $y^2 = \frac{2x}{1+x^2}$ 2

(γ) $y = \ln\left(\frac{2x}{1+x^2}\right)$. 2

(ii) Show that the equation $kx^3 + (k-2)x = 0$ can be written in the form of $\frac{2x}{1+x^2} = kx$. 1

(iii) Using a graphical approach based on the curve $y = \frac{2x}{1+x^2}$, or otherwise, find the real values of k for which the equation $kx^3 + (k-2)x = 0$ has exactly one real root. 2

- (b) (i) A particle of mass m travels with constant speed v in a horizontal circle of radius R , centre C around a track banked at an angle θ to the horizontal. The acceleration due to gravity is g . 1
- (α) Draw a diagram showing the forces acting on the particle. 2
- (β) Show that if there is not tendency for the particle to slip sideways then $v = \sqrt{Rg \tan \theta}$.
- (ii) One particle travels in a horizontal circle of radius 1 metre around the lower half of a track where the angle of banking is $\tan^{-1} \frac{5}{18}$. Another particle travels in a horizontal circle of radius 1.2 metres around the upper half of the track where the angle of banking is $\tan^{-1} \frac{16}{27}$. Each particle travels with constant speed so that it has no tendency to slip sideways. The particles are initially observed to be along side each other. 3
- Taking $g = 10 \text{ m s}^{-2}$, find the time that elapses before the particles are next to be alongside each other.

(Question 6 is continued on the next page)

Question 6 (15 marks) (Start a new page)

Marks

(a) The line through O perpendicular to the tangent at $P\left(cp, \frac{c}{p}\right)$ on the rectangular hyperbola $xy = c^2$ meets the tangent at N .

- (i) Find the coordinates of N . 4
- (ii) Show that as p varies, the locus of N is $(x^2 + y^2)^2 = 4c^2xy$. 3

(b) A drinking glass having the form of a right circular cylinder of radius a and height h , is filled with water. The glass is slowly tilted over, spilling water out of it, until it reaches the position where the water's surface bisects the base of the glass. Figure 1 shows this position.

diagram not to scale

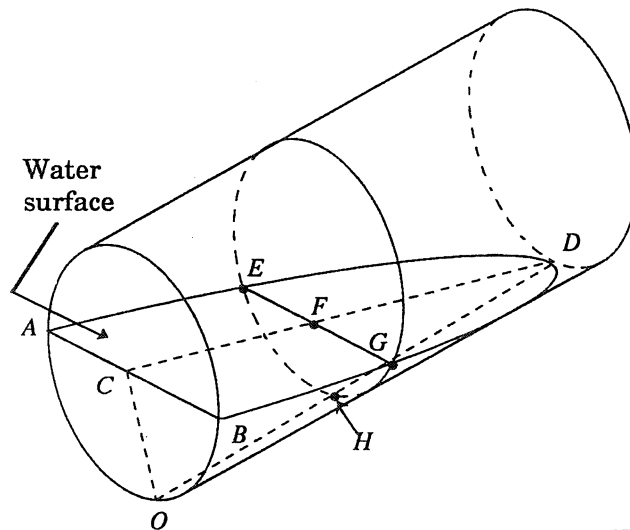
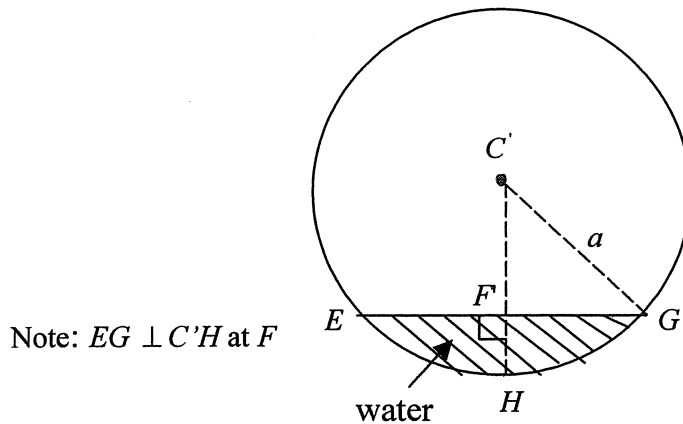


Figure 1

In Figure 1, AB is a diameter of the circular base with centre C , O is the lowest point on the base, and D is the point where the water's surface touches the rim of the glass.

Figure 2 shows a cross-section of the tilted glass parallel to its base. The centre of this circular section is C' and EFG shows the water level. The section cuts the lines CD and OD of Figure 1 in F and H respectively.



Note: $EG \perp C'H$ at F

Figure 2

Figure 3 shows the section COD of the tilted glass.

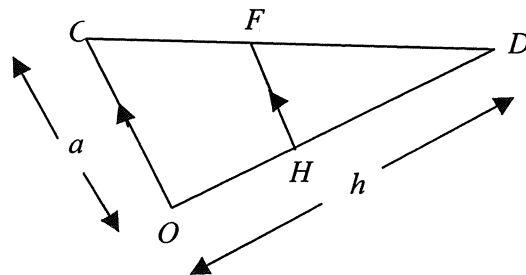


Figure 3

Note: $FH \parallel CO$, $CO = a$, and $OD = h$

diagrams not to scale

- (i) Use Figure 3 to show that $FH = \frac{a}{h}(h - x)$, where $OH = x$. 1
- (ii) Use Figure 2 to show that $C'F = \frac{ax}{h}$ and $\angle HCG = \cos^{-1}\left(\frac{x}{h}\right)$. 2
- (iii) Use (ii) to show that the area of the shaded segment EGH is 2

$$a^2 \left[\cos^{-1}\left(\frac{x}{h}\right) - \left(\frac{x}{h}\right) \sqrt{1 - \left(\frac{x}{h}\right)^2} \right].$$
- (iv) Given that $\int \cos^{-1} \theta \, d\theta = \theta \cos^{-1} \theta - \sqrt{1 - \theta^2}$, 3
find the volume of the water in the tilted glass in Figure 1.

Question 7 (15 marks) (Start a new page)

Marks

- (a) A body of unit mass falls under gravity through a resisting medium. The body falls from rest from a height of 50 metres above the ground. The resistance to its motion is $\frac{1}{100}v^2$ where v metres per second is the speed of the body when it has fallen a distance x metres. The acceleration due to gravity is $g \text{ m s}^{-2}$.

- (i) Show that the equation of the motion of the body is: 2

$$x = g - \frac{1}{100}v^2.$$

- (ii) Show that the terminal velocity V of the body is given by: 1

$$V = \sqrt{100g}.$$

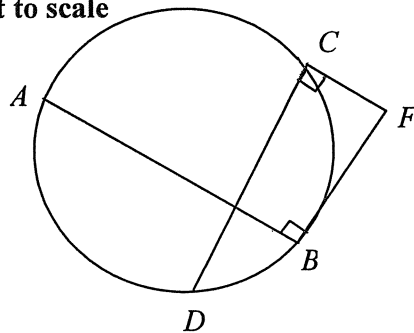
- (iii) Hence show that $v^2 = V^2(1 - e^{-\frac{x}{50}})$. 3

- (iv) Find the distance fallen in metres until the body reaches a velocity equal to 50% that of the terminal velocity. 2

- (v) Find the velocity reached as a percentage of the terminal velocity when the body hits the ground. 2

- (b) In the following figure, AB and CD are two chords of the circles. AB and CD intersect at E . F is a point such that ABF and DCF are right angles.

diagram not to scale



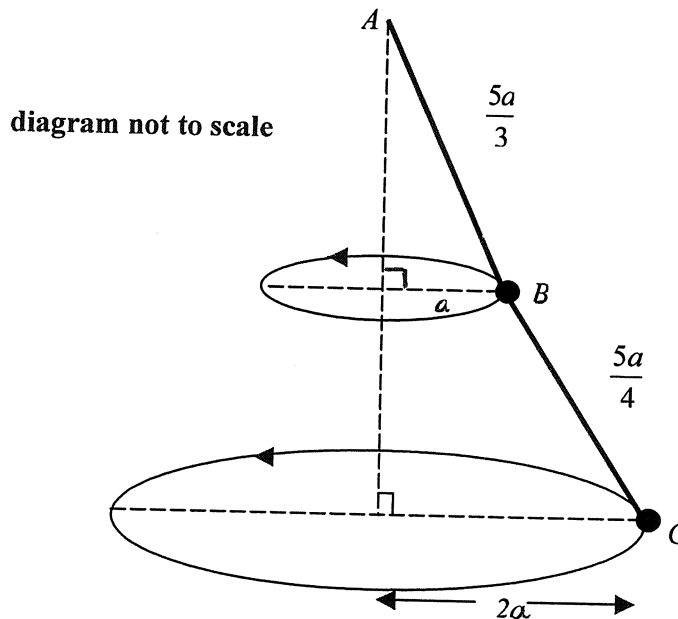
Copy the diagram onto the your answer sheet.
Prove that FE produced is perpendicular to AD .

5

Question 8 (15 marks) (Start a new page)

Marks

- (a) A light inextensible string ABC is such that $AB = \frac{5a}{3}$ and $BC = \frac{5a}{4}$. A particle of mass m is attached to the string at C and a mass of $7m$ is attached at B . The end A is tied to a fixed point and the whole system rotates steadily with uniform angular velocity about the vertical through A in such a way that B and C describe horizontal circles of radii a and $2a$ respectively. The acceleration due to gravity is g .



- (i) Show that the tension in BC is $\frac{5mg}{3}$. 3
- (ii) Find the tension in AB . 2
- (iii) Find the speeds of B and C . 4
- (b) (i) Show that if $I_n = \int \frac{dx}{(x^2 + a^2)^n}$, then 4
- $$I_n = \frac{1}{2a^2(n-1)} \left(\frac{x}{(x^2 + a^2)^{n-1}} + (2n-3)I_{n-1} \right).$$
- (ii) Hence evaluate $I_2 = \int_0^1 \frac{dx}{(x^2 + a^2)^2}$. 2

☺ END of Paper ☺

